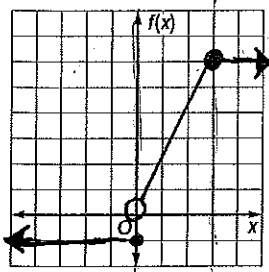


2-6 Skills Practice

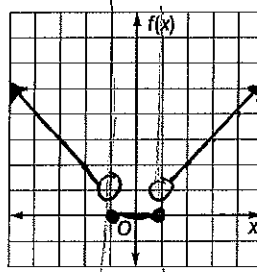
Special Functions

Graph each function. Identify the domain and range.

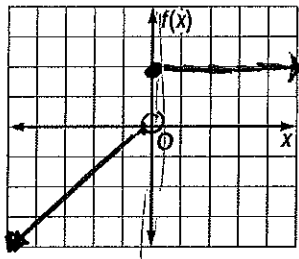
$$1. f(x) = \begin{cases} -1 & \text{if } x \leq 0 \\ 2x & \text{if } 0 < x \leq 3 \\ 6 & \text{if } x > 3 \end{cases}$$



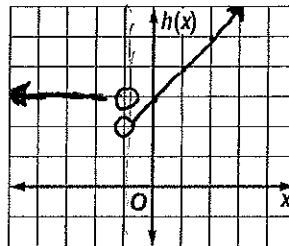
$$2. f(x) = \begin{cases} -x & \text{if } x < -1 \\ 0 & \text{if } -1 \leq x \leq 1 \\ x & \text{if } x > 1 \end{cases}$$



$$3. f(x) = \begin{cases} x & \text{if } x < 0 \\ 2 & \text{if } x \geq 0 \end{cases}$$

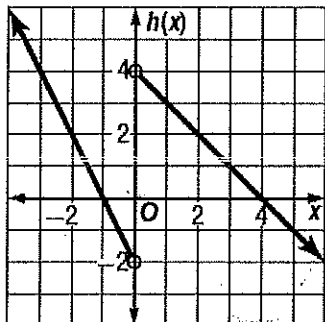


$$4. h(x) = \begin{cases} 3 & \text{if } x < -1 \\ x + 1 & \text{if } x > 1 \end{cases}$$



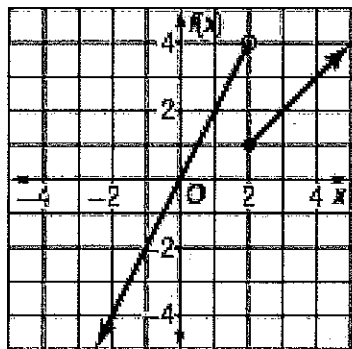
Write the piecewise function from the graph.

5.



$$h(x) = \begin{cases} -2x - 2 & x < 0 \\ -x + 4 & x > 0 \end{cases}$$

6.



$$f(x) = \begin{cases} 2x & x < 2 \\ x - 1 & x \geq 2 \end{cases}$$